




Problem Solving


Processes & Practices

16. The post office had 912 stamps on Friday. By Saturday 189 stamps were left. How many stamps were sold on Friday?




_____ stamps

17. Dakota had 200 plastic bugs. He lost some bugs. He has 155 bugs left. How many bugs did he lose?



_____ bugs

18. There are 350 pieces of popcorn. Ayana and Gabby eat 177 pieces. How many pieces are left?



_____ pieces

HOT Problem 228 students like red. 293 students like blue. 154 students like green. How many more students like red or green than blue? Explain.

Name _____

My Homework

Lesson 6

Subtract Three-Digit Numbers



Homework Helper

Need help? connectED.mcgraw-hill.com

Sometimes when you subtract, you need to regroup the tens and hundreds.

Find $621 - 475$.

Step 1 Subtract the ones. You cannot subtract 5 from 1. Regroup 1 ten as 10 ones.

Step 2 Subtract the tens. You cannot subtract 7 from 1. Regroup.

Step 3 Subtract the hundreds.

hundreds	tens	ones
5	11	11
4	2	5
4	7	5
1	4	6

Practice

Subtract.

1.

□	□	□
4	5	3
- 3	5	1

2.

□	□	□
6	1	2
- 1	5	9



Problem Solving

Processes & Practices


19. Lucas is reading a book that is 239 pages long. He has read 159 pages. How many pages does he have left to read?

_____ pages

20. Our class read 753 books over the summer. The girls read 394 books. How many books did the boys read?

_____ books

I do a lot of summer reading!



21. Our school library has 125 books about pets. I have read 96 of the books. How many books do I have left to read?

_____ books

Write Math

Explain how you rewrite three-digit subtraction problems to solve.

Name _____

My Homework

Lesson 7

Rewrite Three-Digit Subtraction

Homework Helper



Need help? connectED.mcgraw-hill.com

Find $356 - 298$.

Step 1 Rewrite. Place the greater number on top.

Step 2 Subtract. Regroup if necessary.

$$\begin{array}{r}
 2 \quad | \quad 14 \quad | \quad 16 \\
 \cancel{3} \quad \cancel{5} \quad \cancel{6} \\
 - \quad 2 \quad | \quad 9 \quad | \quad 8 \\
 \hline
 \quad \quad | \quad 5 \quad | \quad 8
 \end{array}$$

Practice

Rewrite the problem. Subtract.

1. $724 - 235$

-		

2. $616 - 337$

-		

3. $374 - 286$

-		

4. $875 - 596$

-		

5. $945 - 387$

-		

6. $435 - 294$

-		

Rewrite the problem. Subtract.

7. $162 - 89$

8. $619 - 254$

9. $195 - 99$

10. 835 people are on a boat. 295 people get off of the boat. How many people are still on the boat?

Ahoy!



_____ people

Test Practice

11. Which problem shows how to rewrite the problem?

$368 - 179 =$ _____

$$\begin{array}{r} 368 \\ - 179 \\ \hline 200 \end{array}$$

$$\begin{array}{r} 179 \\ - 368 \\ \hline 411 \end{array}$$

$$\begin{array}{r} 368 \\ - 179 \\ \hline 189 \end{array}$$

$$\begin{array}{r} 368 \\ + 179 \\ \hline 547 \end{array}$$



Math at Home Write a three-digit subtraction number sentence for your child. Have him or her rewrite the number sentence vertically and then subtract.

Name _____

My Homework

Lesson 9

Subtract Across Zeros

Homework Helper



Need help? connectED.mcgraw-hill.com

You can subtract across zeros.

Find $600 - 336$.

Step 1 Subtract the ones.
Regroup 1 hundred into 10 tens. Then regroup 1 ten as 10 ones.

Step 2 Subtract the tens.

Step 3 Subtract the hundreds.

hundreds	tens	ones
5	9	10
3	3	6
2	6	4

Practice

Subtract.

1.
$$\begin{array}{r} 300 \\ - 251 \\ \hline \end{array}$$

2.
$$\begin{array}{r} 600 \\ - 139 \\ \hline \end{array}$$

3.
$$\begin{array}{r} 700 \\ - 386 \\ \hline \end{array}$$

4.
$$\begin{array}{r} 200 \\ - 126 \\ \hline \end{array}$$

5.
$$\begin{array}{r} 500 \\ - 385 \\ \hline \end{array}$$

6.
$$\begin{array}{r} 800 \\ - 272 \\ \hline \end{array}$$

Subtract.

7. $100 - 89$

-		

8. $600 - 564$

-		

9. $500 - 268$

-		

10. 900
 $- 432$

11. 700
 $- 364$

12. 200
 $- 147$

13. 400 pineapples are planted in a row. 293 pineapples get picked. How many pineapples are still in the row?

_____ pineapples

Test Practice


14. Find $600 - 289$.

889

311

301

489



Copyright © The McGraw-Hill Companies, Inc. Burke/Triolo Productions/Artville/Getty Images



Math at Home Have your child explain how to subtract 392 from 800.

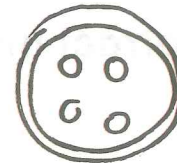
Name



Problem Solving


I  buttons!

21. There are 620 buttons. 200 of them are square. The rest are round. How many buttons are round?



_____ buttons

22. Clara had 359 pennies. She lost some. Now she has 266 pennies. How many pennies did Clara lose?



_____ pennies

Test Practice

23. There are 334 cars in the parking lot on Sunday. On Monday, there are 182 cars. How many more cars were there on Sunday?

334

182

152

150

Reflect

Show the ways to subtract three-digit numbers.

Subtract hundreds.

$$800 - 500 = \underline{\quad}$$

Regroup tens to subtract.

$$\begin{array}{r} 835 \\ - 726 \\ \hline \end{array}$$

ESSENTIAL QUESTION


How can I subtract three-digit numbers?

Regroup tens and hundreds to subtract.

$$\begin{array}{r} 935 \\ - 397 \\ \hline \end{array}$$

Rewrite to subtract.

$$381 - 298$$



You are part of this equation!

You + School = Cool