

Name _____

My Homework

Lesson 5

Dollars

Homework Helper



Need help? connectED.mcgraw-hill.com

One dollar has a value of 100 cents or 100¢. To write 1 dollar, use a dollar sign.



one-dollar bill = \$1.00

\$1.00 is equal to



Count to find the value of the coins.
Circle combinations that equal \$1.00.

1.



2.



Count the coins. Write the value.
Circle combinations that equal \$1.00.

3.



4.



5. Jen has 2 quarters and 4 dimes. She wants to buy 1 bag of pretzels for \$1. How much more money does she need?

6. Diego has 3 quarters, 1 dime, and 1 nickel. How many more nickels does he need to have \$1?

_____ nickels



Vocabulary Check



Circle the correct choices.

7. **one dollar** \$1 1\$ \$1.00 1¢



Math at Home Have your child use various coins to show you two ways to make \$1.

Name

My Homework

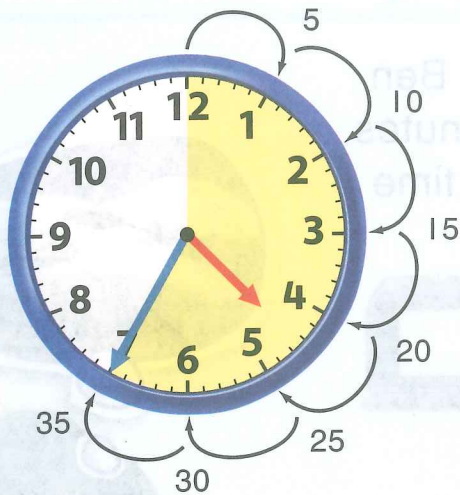
Lesson 5

Time to Five-Minute Intervals

Homework Helper



Need help? connectED.mcgraw-hill.com



It takes 5 minutes for the minute hand to move to the next number. Skip count by 5s to tell time.

This clock shows 35 minutes after 4 o'clock.



The time is shown another way.





Practice

Read the time. Write the time.



1.



2.



3.




Tell what time is shown. Draw the minute hand to show the time.

4.




5.



6.



7. It is 1:00. Hunter is waiting for Ben. Ben said he would meet Hunter in 25 minutes but he arrived 5 minutes late. What time does Ben meet Hunter?



Test Practice

8. A train leaves at 10:40. Which clock shows 10:40?



Math at Home Ask your child to look at an analog clock on the hour. Have him or her tell you what time it will be in 5 minutes, 10 minutes, 25 minutes, and 50 minutes.

Name _____

My Homework

Lesson 6

A.M. and P.M.

Homework Helper



Need help? connectED.mcgraw-hill.com


The hours from midnight until noon are labeled A.M. The hours from noon until midnight are labeled P.M.

Helpful Hint


12:00 P.M. is noon.

12:00 A.M. is midnight.


Wake Up



9:00 A.M.



Look at the Moon




9:00 P.M.




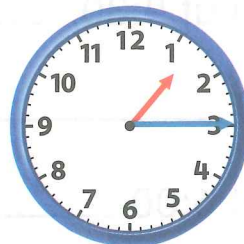
Tell what time is shown for the activity. Write the time.
Circle A.M. or P.M.

1. Go to the Park




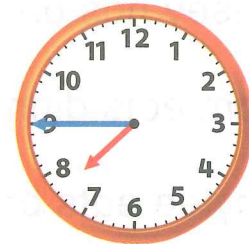
A.M.
P.M.

2. Go Bowling



A.M.
P.M.


3. Make your Bed



A.M.
P.M.


Tell what time is shown for the activity.
Draw the hands on the clock. Circle A.M. or P.M.

4. Rooster Crowing





A.M.
P.M.

5. Flying a Kite



A.M.
P.M.

6. Going Shopping



A.M.
P.M.

7. Jay and Mike went to the county fair with Mike's parents. They got there at 10:00 A.M. They stayed for 4 and a half hours. Did they get home in the A.M. or P.M.? _____



Vocabulary Check



Complete each sentence.

A.M.

P.M.

8. Casey has an art lesson at 4:30. _____.
9. Sam eats dinner at 5:30 _____.
10. Kaylee eats breakfast at 6:00 _____.



Math at Home Several times in the next 24 hours, ask your child for the time and then if it is A.M. or P.M.